


SPRING 2020 | PACK #1



At-home Learning




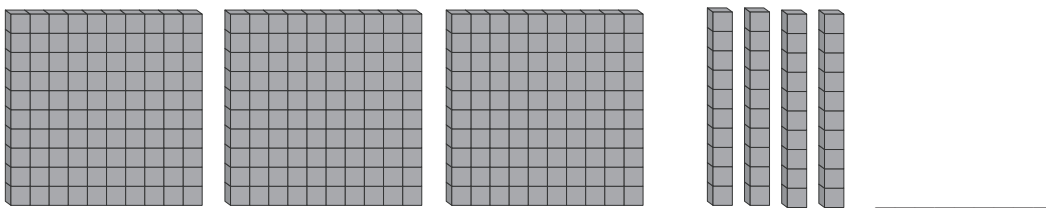
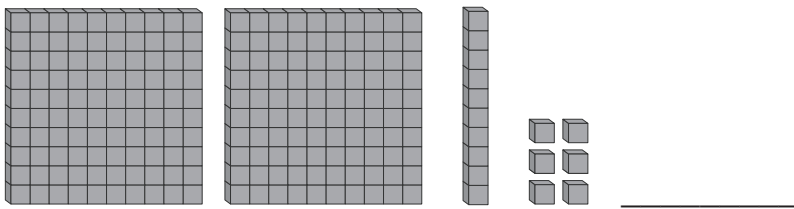
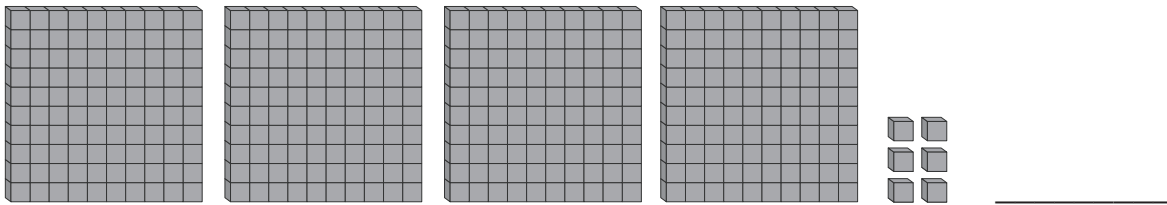
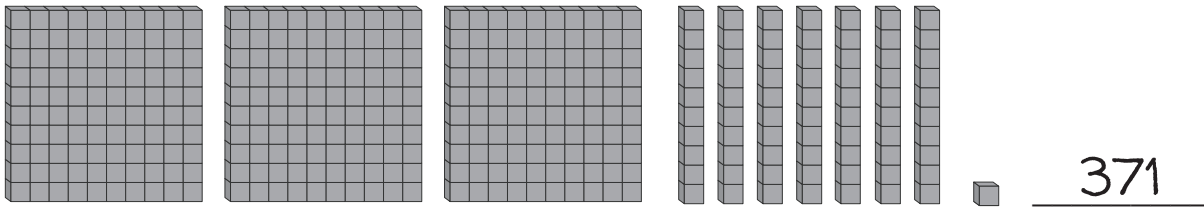
GRADE 2

For more print materials, check out
IXL's workbook series on [Amazon.com](https://www.amazon.com)!

2

Place value

Write the number for each model.



3

Two-digit addition

Add.

$$\begin{array}{r} 23 \\ + 35 \\ \hline \end{array}$$

$$\begin{array}{r} 37 \\ + 12 \\ \hline \end{array}$$

$$\begin{array}{r} 32 \\ + 34 \\ \hline \end{array}$$

$$\begin{array}{r} 42 \\ + 22 \\ \hline \end{array}$$

$$\begin{array}{r} 51 \\ + 38 \\ \hline \end{array}$$

$$\begin{array}{r} 42 \\ + 42 \\ \hline \end{array}$$

$$\begin{array}{r} 73 \\ + 24 \\ \hline \end{array}$$

$$\begin{array}{r} 12 \\ + 71 \\ \hline \end{array}$$

$$\begin{array}{r} 43 \\ + 36 \\ \hline \end{array}$$

$$\begin{array}{r} 84 \\ + 14 \\ \hline \end{array}$$

$$\begin{array}{r} 15 \\ + 41 \\ \hline \end{array}$$

$$\begin{array}{r} 24 \\ + 63 \\ \hline \end{array}$$

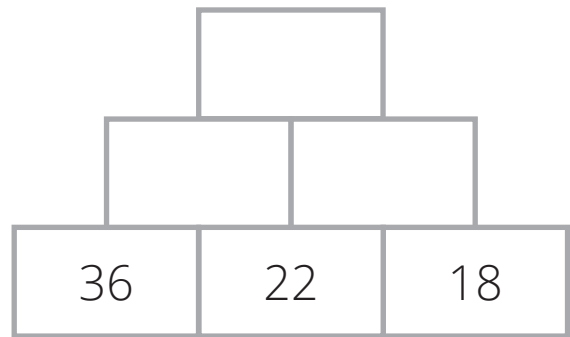
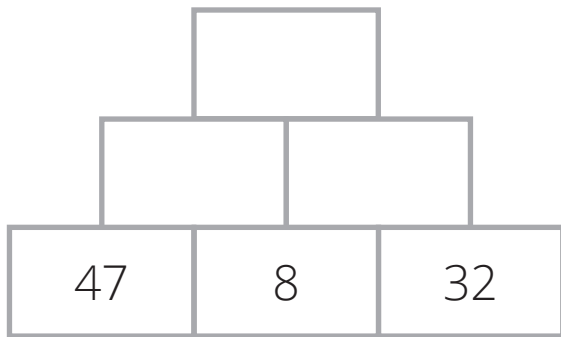
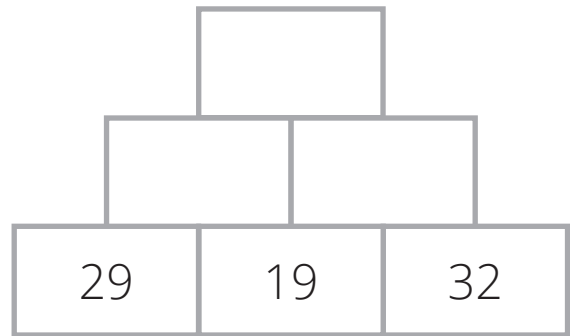
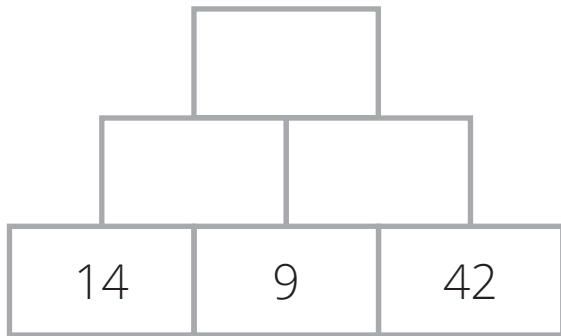
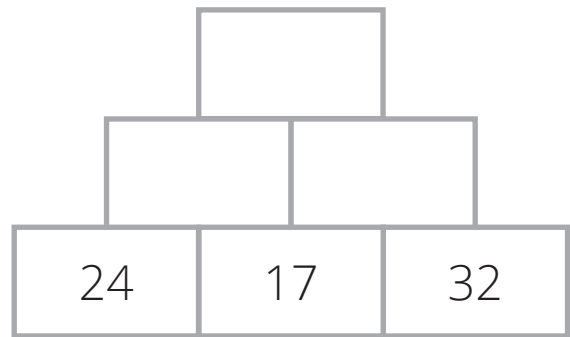
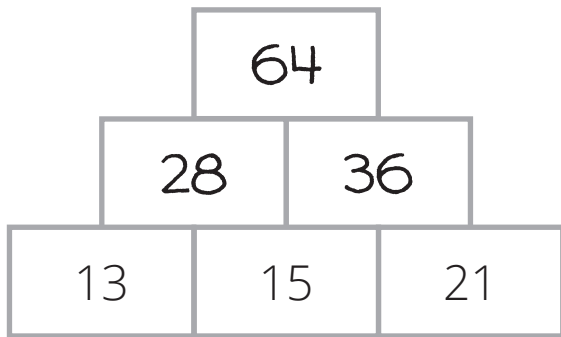
$$\begin{array}{r} 33 \\ + 32 \\ \hline \end{array}$$

$$\begin{array}{r} 64 \\ + 35 \\ \hline \end{array}$$

$$\begin{array}{r} 62 \\ + 16 \\ \hline \end{array}$$

4 Two-digit addition

Write the missing numbers. Each number in the pyramid is the sum of the two numbers below it.



5

Two-digit subtraction

Subtract.

$$\begin{array}{r} 48 \\ -23 \\ \hline \end{array}$$

$$\begin{array}{r} 56 \\ -12 \\ \hline \end{array}$$

$$\begin{array}{r} 33 \\ -22 \\ \hline \end{array}$$

$$\begin{array}{r} 65 \\ -34 \\ \hline \end{array}$$

$$\begin{array}{r} 47 \\ -24 \\ \hline \end{array}$$

$$\begin{array}{r} 59 \\ -27 \\ \hline \end{array}$$

$$\begin{array}{r} 78 \\ -41 \\ \hline \end{array}$$

$$\begin{array}{r} 69 \\ -54 \\ \hline \end{array}$$

$$\begin{array}{r} 46 \\ -33 \\ \hline \end{array}$$

$$\begin{array}{r} 84 \\ -13 \\ \hline \end{array}$$

$$\begin{array}{r} 52 \\ -21 \\ \hline \end{array}$$

$$\begin{array}{r} 85 \\ -52 \\ \hline \end{array}$$

$$\begin{array}{r} 97 \\ -56 \\ \hline \end{array}$$

$$\begin{array}{r} 67 \\ -41 \\ \hline \end{array}$$

$$\begin{array}{r} 68 \\ -45 \\ \hline \end{array}$$

6

Two-digit subtraction with regrouping

Subtract.

$$\begin{array}{r} 63 \\ -26 \\ \hline \end{array}$$

$$\begin{array}{r} 86 \\ -57 \\ \hline \end{array}$$

$$\begin{array}{r} 75 \\ -67 \\ \hline \end{array}$$

$$\begin{array}{r} 42 \\ -24 \\ \hline \end{array}$$

$$\begin{array}{r} 74 \\ -38 \\ \hline \end{array}$$

$$\begin{array}{r} 56 \\ -28 \\ \hline \end{array}$$

$$\begin{array}{r} 82 \\ -45 \\ \hline \end{array}$$

$$\begin{array}{r} 92 \\ -67 \\ \hline \end{array}$$

$$\begin{array}{r} 80 \\ -47 \\ \hline \end{array}$$

$$\begin{array}{r} 41 \\ -18 \\ \hline \end{array}$$

$$\begin{array}{r} 87 \\ -49 \\ \hline \end{array}$$

$$\begin{array}{r} 50 \\ -36 \\ \hline \end{array}$$

7

Two-digit addition and subtraction

Add or subtract.

$$\begin{array}{r} 65 \\ + 23 \\ \hline \end{array}$$

$$\begin{array}{r} 48 \\ - 23 \\ \hline \end{array}$$

$$\begin{array}{r} 78 \\ - 36 \\ \hline \end{array}$$

$$\begin{array}{r} 36 \\ + 41 \\ \hline \end{array}$$

$$\begin{array}{r} 83 \\ - 27 \\ \hline \end{array}$$

$$\begin{array}{r} 33 \\ + 34 \\ \hline \end{array}$$

$$\begin{array}{r} 42 \\ - 25 \\ \hline \end{array}$$

$$\begin{array}{r} 67 \\ - 18 \\ \hline \end{array}$$

$$\begin{array}{r} 57 \\ + 23 \\ \hline \end{array}$$

$$\begin{array}{r} 91 \\ - 38 \\ \hline \end{array}$$

$$\begin{array}{r} 25 \\ + 57 \\ \hline \end{array}$$

$$\begin{array}{r} 53 \\ + 38 \\ \hline \end{array}$$

8

Counting sides


Write the number of sides for each shape.




3























IXL.com
skill ID
EAQ

9

Telling time

Draw a line between the matching times.



10 Bar graphs

Allen works at a bakery. He made a bar graph of the cake flavors that people ordered in the last week.



Answer each question.

How many vanilla cakes did people order? _____ cakes

Which cake flavor was ordered the least? _____

How many more chocolate cakes did people order than carrot cakes? _____ cakes



How many cakes did people order in all? _____ cakes

11 Answer key

PAGE 1

600	700	800	900	1,000
200	300	400	500	600
430	530	630	730	830
274	374	474	574	674
202	302	402	502	602

PAGE 2

371
406
216
340
153

PAGE 3

$\begin{array}{r} 23 \\ + 35 \\ \hline 58 \end{array}$	$\begin{array}{r} 37 \\ + 12 \\ \hline 49 \end{array}$	$\begin{array}{r} 32 \\ + 34 \\ \hline 66 \end{array}$
$\begin{array}{r} 42 \\ + 22 \\ \hline 64 \end{array}$	$\begin{array}{r} 51 \\ + 38 \\ \hline 89 \end{array}$	$\begin{array}{r} 42 \\ + 42 \\ \hline 84 \end{array}$
$\begin{array}{r} 73 \\ + 24 \\ \hline 97 \end{array}$	$\begin{array}{r} 12 \\ + 71 \\ \hline 83 \end{array}$	$\begin{array}{r} 43 \\ + 36 \\ \hline 79 \end{array}$
$\begin{array}{r} 84 \\ + 14 \\ \hline 98 \end{array}$	$\begin{array}{r} 15 \\ + 41 \\ \hline 56 \end{array}$	$\begin{array}{r} 24 \\ + 63 \\ \hline 87 \end{array}$
$\begin{array}{r} 33 \\ + 32 \\ \hline 65 \end{array}$	$\begin{array}{r} 64 \\ + 35 \\ \hline 99 \end{array}$	$\begin{array}{r} 62 \\ + 16 \\ \hline 78 \end{array}$

PAGE 4

64	90
28 36	41 49
13 15 21	24 17 32
74	99
23 51	48 51
14 9 42	29 19 32
95	98
55 40	58 40
47 8 32	36 22 18

PAGE 5

$\begin{array}{r} 48 \\ - 23 \\ \hline 25 \end{array}$	$\begin{array}{r} 56 \\ - 12 \\ \hline 44 \end{array}$	$\begin{array}{r} 33 \\ - 22 \\ \hline 11 \end{array}$
$\begin{array}{r} 65 \\ - 34 \\ \hline 31 \end{array}$	$\begin{array}{r} 47 \\ - 24 \\ \hline 23 \end{array}$	$\begin{array}{r} 59 \\ - 27 \\ \hline 32 \end{array}$
$\begin{array}{r} 78 \\ - 41 \\ \hline 37 \end{array}$	$\begin{array}{r} 69 \\ - 54 \\ \hline 15 \end{array}$	$\begin{array}{r} 46 \\ - 33 \\ \hline 13 \end{array}$
$\begin{array}{r} 84 \\ - 13 \\ \hline 71 \end{array}$	$\begin{array}{r} 52 \\ - 21 \\ \hline 31 \end{array}$	$\begin{array}{r} 85 \\ - 52 \\ \hline 33 \end{array}$
$\begin{array}{r} 97 \\ - 56 \\ \hline 41 \end{array}$	$\begin{array}{r} 67 \\ - 41 \\ \hline 26 \end{array}$	$\begin{array}{r} 68 \\ - 45 \\ \hline 23 \end{array}$

PAGE 6

$\begin{array}{r} 63 \\ - 26 \\ \hline 37 \end{array}$	$\begin{array}{r} 86 \\ - 57 \\ \hline 29 \end{array}$	$\begin{array}{r} 75 \\ - 67 \\ \hline 8 \end{array}$
$\begin{array}{r} 42 \\ - 24 \\ \hline 18 \end{array}$	$\begin{array}{r} 74 \\ - 38 \\ \hline 36 \end{array}$	$\begin{array}{r} 56 \\ - 28 \\ \hline 28 \end{array}$
$\begin{array}{r} 82 \\ - 45 \\ \hline 37 \end{array}$	$\begin{array}{r} 92 \\ - 67 \\ \hline 25 \end{array}$	$\begin{array}{r} 80 \\ - 47 \\ \hline 33 \end{array}$
$\begin{array}{r} 41 \\ - 18 \\ \hline 23 \end{array}$	$\begin{array}{r} 87 \\ - 49 \\ \hline 38 \end{array}$	$\begin{array}{r} 50 \\ - 36 \\ \hline 14 \end{array}$

PAGE 7

$\begin{array}{r} 65 \\ + 23 \\ \hline 88 \end{array}$	$\begin{array}{r} 48 \\ - 23 \\ \hline 25 \end{array}$	$\begin{array}{r} 78 \\ - 36 \\ \hline 42 \end{array}$
$\begin{array}{r} 36 \\ + 41 \\ \hline 77 \end{array}$	$\begin{array}{r} 83 \\ - 27 \\ \hline 56 \end{array}$	$\begin{array}{r} 33 \\ + 34 \\ \hline 67 \end{array}$
$\begin{array}{r} 42 \\ - 25 \\ \hline 17 \end{array}$	$\begin{array}{r} 67 \\ - 18 \\ \hline 49 \end{array}$	$\begin{array}{r} 57 \\ + 23 \\ \hline 80 \end{array}$
$\begin{array}{r} 91 \\ - 38 \\ \hline 53 \end{array}$	$\begin{array}{r} 25 \\ + 57 \\ \hline 82 \end{array}$	$\begin{array}{r} 53 \\ + 38 \\ \hline 91 \end{array}$

PAGE 8

3	4	4
6	3	6
7	10	6

PAGE 9

PAGE 10

7 cakes
lemon
3 cakes
23 cakes